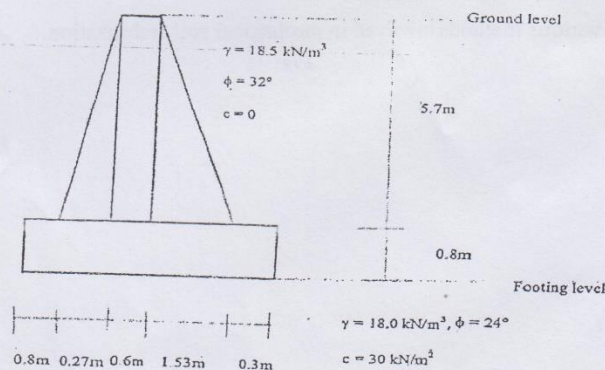


6 Exam.	Back		
Level	BE	Full Marks	80
Programme	BCE	Pass Marks	32
Year / Part	III / I	Time	3 hrs.

Subject: - Foundation Engineering (CE 602)

- ✓ Candidates are required to give their answers in their own words as far as practicable.
- ✓ Attempt All questions.
- ✓ The figures in the margin indicate Full Marks.
- ✓ Assume suitable data if necessary.

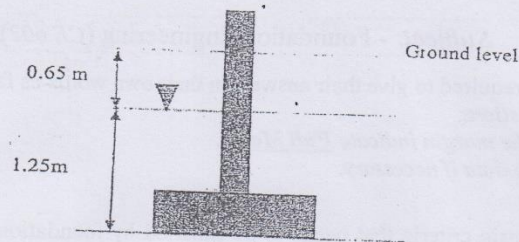
1. What are the basic criteria that needs to be satisfied by foundations for its satisfactory performance? [2]
2. Explain the following with suitable example: [3×4]
 - a) Objectives of site investigation.
 - b) Accessible and inaccessible method of soil exploration
 - c) Thick walled and thin walled sampler
 - d) Representative and non-preventative soil sample
3. a) Write down the step by step procedure of Culmann's graphical method for determining the total active thrust behind the retaining wall carrying surcharge on the cohesion-less inclined backfill. [5]
 - b) For a gravity retaining wall as shown below, determine the following using Coulomb's earth pressure theory.
 - i) FOS against overturning
 - ii) FOS against sliding
 - iii) The pressure on the soil at the toe and heel



4. Explain Terzaghi trap door experiment to demonstrate the arching effect in soil with suitable sketches. [4]
5. a) What is coffer dam?
 - b) Explain the steps to be followed while designing a full length of general cantilever sheet pile wall if the dredge depth is 'h' meters from the top ground surface and depth of embedment is 'd' from dredge level. Take sandy soil layer above dredge level and clayey soil below the dredge level. Mention all other necessary conditions assumed. [1+3]

6. a) Describe the limitations of the Terzaghi's bearing capacity equation. [3]

b) A square footing has to be constructed on the cohesion-less soil as shown in the figure below. Assuming $\gamma = 16.5 \text{ kN/m}^3$, $\gamma_{\text{sat}} = 18.5 \text{ kN/m}^3$, $\phi = 34^\circ$, and FOS = 3, determine the size of the footing if the gross allowable load on the footing is to be 675 kN. Take $N_q = 29.44$ and $N_\gamma = 41.06$. [9]



7. Explain the following.

a) Fully floated and partially floated raft. [3×2]

b) Various conditions that result the selection of raft foundation.

c) Differentiate the raft of types: plate thickened under column and beam slab structures.

8. a) What is negative skin friction? What are the conditions where a pile foundation is more suitable than shallow foundation? [2+3]

b) A group of 9 piles, 15 m long and 350 mm in diameter is to be arranged in square pattern in clay with average unconfined compressive strength of 80 kN/m^2 . Determine the center to center spacing of the piles for the efficiency of 1. Neglect the point bearing. [7]

9. Explain with clear sketches the various components of well foundations. What are the sinking procedure of the well and mention the measures to be taken for sinking the wells and correcting the tilts and shifts occurred during sinking of caissons. [3+5]

10. a) Define soil stabilization and mention its necessities. [2]

b) Describe various methods involved in mechanical soil stabilization. [2]

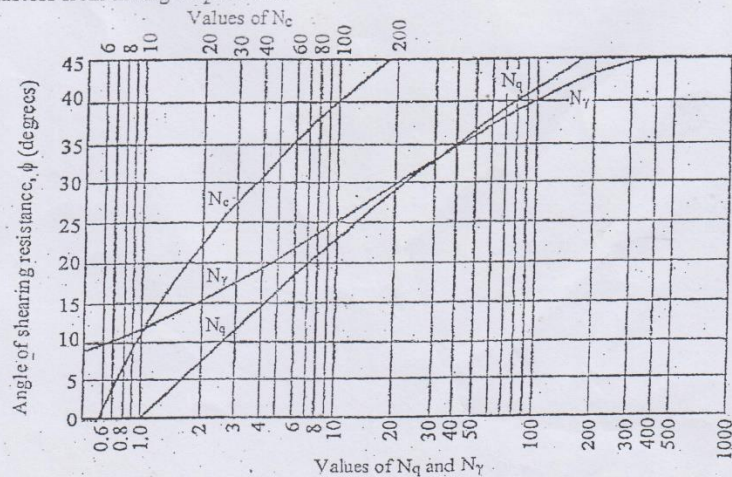
TRIBHUVAN UNIVERSITY
INSTITUTE OF ENGINEERING
Examination Control Division
2078 Kartik

Exam.	Back		
Level	BE	Full Marks	80
Programme	BCE	Pass Marks	32
Year / Part	III / I	Time	3 hrs.

Subject: - Foundation Engineering (CE 602)

- ✓ Candidates are required to give their answers in their own words as far as practicable.
- ✓ Attempt All questions.
- ✓ The figures in the margin indicate Full Marks.
- ✓ Assume suitable data if necessary.

1. Identify the factors that influence the choice of foundation. What are the things that you will consider while preparing the site investigation report? [2+4]
2. In a site investigation for the design of bridge foundation, what kind of detail information do you set out to obtain? Describe briefly the limitations of plate load test. [5+3]
3. a) What general guidelines are adopted before checking the stability of different types of retaining walls? Explain the different design considerations for retaining walls. [5+3]
 b) A retaining wall of 7.5 m high has two layers of backfill. The soil supported consists of 4.5 m sand ($\gamma = 18 \text{ kN/m}^3$, $\phi = 35^\circ$) overlaying saturated clayey soil ($\gamma = 19.5 \text{ kN/m}^3$, $\phi = 30^\circ$, $C = 16 \text{ kN/m}^2$). The ground water table is at the upper surface of the clay. Make a sketch of the distribution of the active pressure on the wall stating the principal values. Calculate the total earth thrust per meter of the wall and its point of application. Assume that the backfill is horizontal at the surface. [8]
4. Explain the phenomenon of arching in soils. In what respects does the design of flexible retaining walls vary from that of a rigid retaining wall? [1+3]
5. Enlist the uses of sheet pile. Write down the step by step procedure of analysis of anchored sheet pile by free earth support method in granular soil. [1+3]
6. a) Discuss on the findings of Skempton on clayey soil regarding net safe bearing capacity. Why is more differential settlement allowed in clay than in sand? [2+2]
 b) A footing $2 \text{ m} \times 3 \text{ m}$ in plan which is to be laid at a depth of 1.5 m below ground surface to carry a column load having one way eccentricity of 0.26 m along the width. Determine the safe bearing capacity if the water table is 0.5 m below the ground level. Use Terzaghi's theory. Take $c = 20 \text{ kN/m}^2$, $\phi = 35^\circ$ to interpolate the bearing capacity factors from the figure presented. [8]



7. a) Define fully compensated raft foundation. Also derive the relation to calculate its depth. [1+1]
- b) Determine the allowable bearing pressure of a raft foundation $3\text{ m} \times 12\text{ m}$ in plan, resting at depth of 2 m on cohesionless soil. The corrected N value over a depth of 12 m was 22 . It is specified that the differential settlement is not to exceed 20 mm . Water table is at depth of 4 m below the ground level. [4]
8. a) What are the conditions where a pile foundation is more suitable than a shallow foundation? How negative skin friction is calculated for a single pile and group of piles in clay? [2+3]
- b) A friction pile 350 mm diameter is proposed to be driven in a layer of uniform cohesive soil with unconfined compressive strength of 80 kPa . Considering the pile end carry only 30% of the total load, determine the length of the pile required for the ultimate load of 1200 kN . Assume adhesion factor $= 0.80$. [7]
9. What is a well foundation? Show all components in a neat sketch. Discuss the remedies for tilt and shift of well foundation. [1+4+3]
10. Describe mechanical and chemical method of soil stabilization. [2+2]

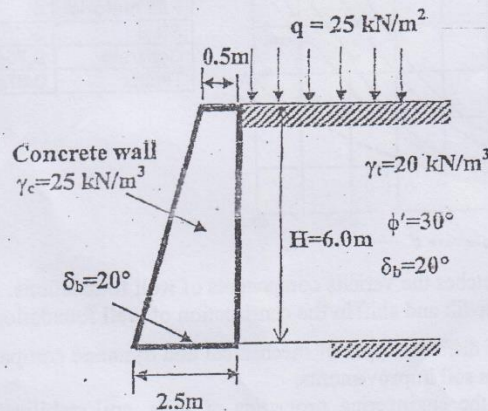
TRIBHUVAN UNIVERSITY
INSTITUTE OF ENGINEERING
Examination Control Division
2078 Bhadra

Exam.	Regular		
Level	BE	Full Marks	80
Programme	BCE	Pass Marks	32
Year / Part	III / I	Time	3 hrs.

Subject: - Foundation Engineering (CE 602)

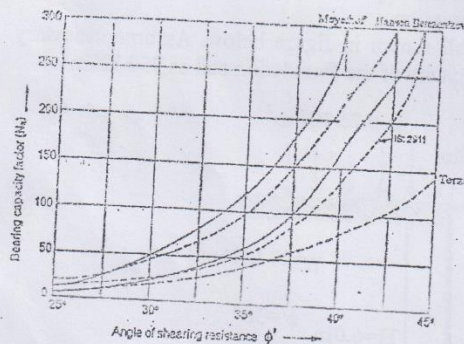
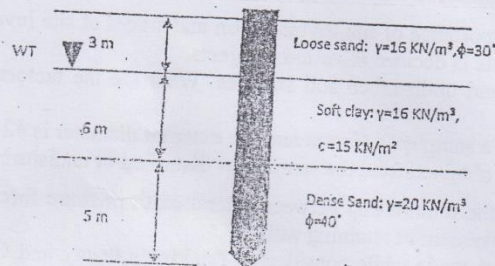
- ✓ Candidates are required to give their answers in their own words as far as practicable.
- ✓ Attempt All questions.
- ✓ The figures in the margin indicate Full Marks.
- ✓ Assume suitable data if necessary.

1. Why foundations are used? Describe different types of foundation. [2]
2. a) Describe in detail the importance of site investigation and stages of site investigation. How the depth of borehole is decided in various projects. [4+3]
- b) Differentiate disturbed and undisturbed soil samples. What are the factors affecting quality of a sample. [2+1]
- c) The internal diameter of a sampler is 40 mm and the external diameter is 42 mm. Will you consider the sample obtained from the sampler as disturbed or undisturbed? [2]
3. a) Draw the plot showing the relationship between lateral earth pressure force per unit length of the wall vs. movement of retaining wall. [2]
- b) Different assumptions are made while considering Rankine's theory and Coulomb's theory for finding lateral earth pressure force per unit length of the wall. Point out four basic differences made during assumption. [4]
- c) Check the stability of the retaining wall shown in figure below. Assume necessary conditions and take ultimate bearing capacity of the foundation soil as 250 kN/m^2 . [10]



4. Describe the following: [2×2]
 - a) Criteria of selecting the pressure diagram for soil having sand and clay layer in braced cut
 - b) Arching of soil and its basic requirements
5. a) Write down the differences between free earth and fixed earth support anchored pile. [2]
- b) Define cofferdam and explain the cellular cofferdam with the help of neat sketch. [2]

6. a) State the different modes of shear failure. In what way the local shear failure differs from general shear failure? [4]
 b) A footing of $2\text{ m} \times 3\text{ m}$ in plan is founded 2 m below the ground level in clay having angle of repose $\phi = 35^\circ$, $c = 25\text{ kPa}$, what will be the allowable load which can be carried by the footing if the load is eccentrically applied with eccentricity along X and Y direction as 0.2 m and 0.3 m respectively. The center of footing in plan is taken as origin. The water table is located 0.8 m below the ground level. Assume soil above water table is as dry. Take dry and saturated unit weight of clay as 16.5 kN/m^3 and 19.6 kN/m^3 respectively. Take $N_c = 57.8$, $N_q = 41.4$ and $N_\gamma = 42.4$. Take FOS as 3.
7. Write down the concept of compensated foundation. Describe with sketches the various types of mat foundations. [6]
 8. Explain the inclined pile. Determine the allowable pile load capacity of the 400 mm diameter driven concrete pile shown in the following figure. [2+10]



Pile material	δ	Values of K	
Steel	20°	0.5	1
Concrete	0.75ϕ	1	2
Timber	0.67ϕ	1.5	4

9. a) Explain with clear sketches the various components of well foundations. [4]
 b) How do you rectify the tilt and shift in the construction of well foundations? [4]
10. a) Write down names of different types of mechanical and dynamic compaction used in regard with foundation soil improvements. [1]
 b) In order to increase the engineering properties of soils, soil stabilization is done. Briefly explain the preloading and stone columns for foundation soil improvements. [3]

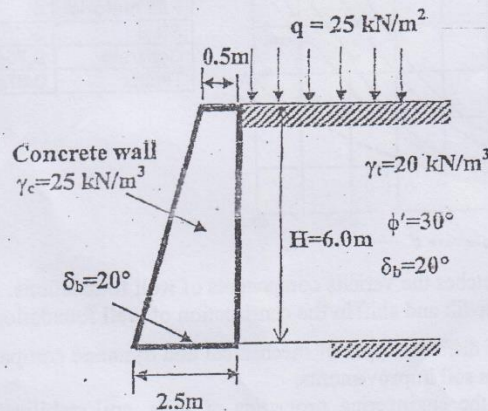
TRIBHUVAN UNIVERSITY
INSTITUTE OF ENGINEERING
Examination Control Division
2078 Bhadra

Exam.	Regular		
Level	BE	Full Marks	80
Programme	BCE	Pass Marks	32
Year / Part	III / I	Time	3 hrs.

Subject: - Foundation Engineering (CE 602)

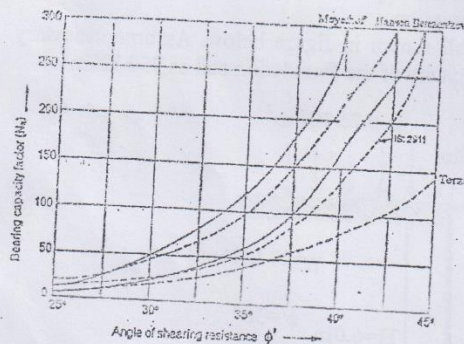
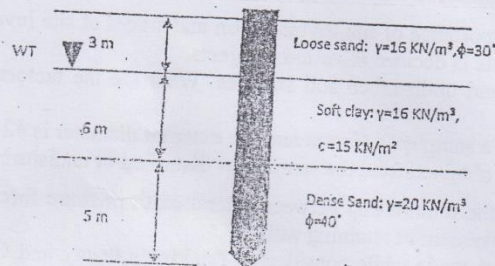
- ✓ Candidates are required to give their answers in their own words as far as practicable.
- ✓ Attempt All questions.
- ✓ The figures in the margin indicate Full Marks.
- ✓ Assume suitable data if necessary.

1. Why foundations are used? Describe different types of foundation. [2]
2. a) Describe in detail the importance of site investigation and stages of site investigation. How the depth of borehole is decided in various projects. [4+3]
- b) Differentiate disturbed and undisturbed soil samples. What are the factors affecting quality of a sample. [2+1]
- c) The internal diameter of a sampler is 40 mm and the external diameter is 42 mm. Will you consider the sample obtained from the sampler as disturbed or undisturbed? [2]
3. a) Draw the plot showing the relationship between lateral earth pressure force per unit length of the wall vs. movement of retaining wall. [2]
- b) Different assumptions are made while considering Rankine's theory and Coulomb's theory for finding lateral earth pressure force per unit length of the wall. Point out four basic differences made during assumption. [4]
- c) Check the stability of the retaining wall shown in figure below. Assume necessary conditions and take ultimate bearing capacity of the foundation soil as 250 kN/m^2 . [10]



4. Describe the following: [2×2]
 - a) Criteria of selecting the pressure diagram for soil having sand and clay layer in braced cut
 - b) Arching of soil and its basic requirements
5. a) Write down the differences between free earth and fixed earth support anchored pile. [2]
- b) Define cofferdam and explain the cellular cofferdam with the help of neat sketch. [2]

6. a) State the different modes of shear failure. In what way the local shear failure differs from general shear failure? [4]
 b) A footing of $2\text{ m} \times 3\text{ m}$ in plan is founded 2 m below the ground level in clay having angle of repose $\phi = 35^\circ$, $c = 25\text{ kPa}$, what will be the allowable load which can be carried by the footing if the load is eccentrically applied with eccentricity along X and Y direction as 0.2 m and 0.3 m respectively. The center of footing in plan is taken as origin. The water table is located 0.8 m below the ground level. Assume soil above water table is as dry. Take dry and saturated unit weight of clay as 16.5 kN/m^3 and 19.6 kN/m^3 respectively. Take $N_c = 57.8$, $N_q = 41.4$ and $N_\gamma = 42.4$. Take FOS as 3.
7. Write down the concept of compensated foundation. Describe with sketches the various types of mat foundations. [6]
 8. Explain the inclined pile. Determine the allowable pile load capacity of the 400 mm diameter driven concrete pile shown in the following figure. [2+10]



Pile material	δ	Values of K	
Steel	20°	0.5	1
Concrete	0.75ϕ	1	2
Timber	0.67ϕ	1.5	4

9. a) Explain with clear sketches the various components of well foundations. [4]
 b) How do you rectify the tilt and shift in the construction of well foundations? [4]
10. a) Write down names of different types of mechanical and dynamic compaction used in regard with foundation soil improvements. [1]
 b) In order to increase the engineering properties of soils, soil stabilization is done. Briefly explain the preloading and stone columns for foundation soil improvements. [3]

TRIBHUVAN UNIVERSITY
INSTITUTE OF ENGINEERING
Examination Control Division
2076 Ashwin

Exam.	Back		
Level	BE	Full Marks	80
Programme	BCE	Pass Marks	32
Year / Part	III / I	Time	3 hrs.

Subject: - Foundation Engineering (CE 602)

- ✓ Candidates are required to give their answers in their own words as far as practicable.
- ✓ Attempt All questions.
- ✓ The figures in the margin indicate Full Marks.
- ✓ Assume suitable data if necessary.

1. Explain the major criteria to be satisfied in the design of a foundation. [2]
2. a) What makes pressure meter testing quite distinctive as compared to other field tests? [2]
 b) List the factors that will consider for deciding the depth of soil exploration. If you are in-charge of subsoil exploration of important structures, how do you decide the depth and lateral extent of soil exploration? [2+5]
3. c) A soil sampler has the following dimensions: inside diameter of the cutting edge=69 mm; outside diameter of cutting edge=73 mm; inside diameter of the sampling tube = 70mm and outside diameter of the sampling tube = 72 mm. Calculate: (i) inside clearance (ii) outside clearance and (iii) area ratio of the sampler. [3]
 a) What do you understand by "General State of Plastic Equilibrium"? How the retaining walls can be proportioned? [3+5]
 b) A 6 m high vertical wall supports a saturated cohesive backfill with horizontal surface. The top 3 m of backfill weighs 18 kN/m^3 and cohesion of 18 kN/m^2 . The bulk unit weight and cohesion of bottom 3 m of the wall are 20 kN/m^3 and 25 kN/m^2 respectively. What is the likely depth of tension crack? If the tension crack develops what will be the active earth pressure? Draw the pressure distribution diagram and determine the point of application of the resultant pressure. [8]
4. What is arching in soil? What are the essential requirements for arching effect to come into play? Describe Terzaghi's arching theory. [1+1+2]
5. What is cofferdam? An excavation of 5 m deep is to be carried out in sandy soil deposit having unit weight = 22 kN/m^3 and angle of shearing resistance = 33° . To support the soil, cantilever sheet pile walls are driven into the ground prior to excavation. Determine the depth of embedment needed for the sheet pile to retain the backfill. The water table is located below the base of the sheet pile. [1+3]
6. a) How do you ascertain whether a foundation soil is likely to fail in local shear or in general shear? Explain the limitations of different classical bearing capacity theories. [2+3]
 b) A circular footing of 2.5 m diameter carries a gross load of 2000 KN. The supporting soil is clayey sand ($\phi=30^\circ$, $\gamma=19 \text{ kN/m}^3$). Determine the depth at which the footing should be located to provide the factor of safety 3. Use Terzaghi's theory. $N_c=37.2$, $N_q=22.5$, $N_\gamma=19.7$ for $\phi=30^\circ$. [7]
7. Explain about compensated foundation. Describe with neat sketches the various types of mat foundations. [2+4]
8. a) What are the different circumstances under which a pile foundation is used? How is negative skin friction calculated for a single pile and a group of piles in clay? [1+3]

- b) A 15 m long closed end steel pipe pile group (3x4) consists of 12 piles of a 300 mm diameter and evenly spaced at 900 mm, center-to-center, is driven into layered undrained clay. The top 6 m consists of clay with undrained cohesion of 50 kPa and adhesion factor of 0.74, followed by 6 m of clay with undrained cohesion of 65 kPa and adhesion factor of 0.62, which was underlain by stiff clay with undrained cohesion of 90 kPa and adhesion factor of 0.50. Estimate the allowable load carrying capacity of pile group. Take factor of safety=2.5. [8]
9. What is a well foundation? Show all components in a neat sketch. Discuss the remedies for tilt and shift of well foundation. [1+4+3]
10. What is stone column? Explain the soil stabilization by use of admixture. [1+3]

TRIBHUVAN UNIVERSITY
INSTITUTE OF ENGINEERING
Examination Control Division
2075 Chaitra

Exam.	Region/Part		
Level	BE	Full Marks	80
Programme	BCE	Pass Marks	32
Year / Part	III / I	Time	3 hrs.

Subject: - Foundation Engineering (CE 602)

- ✓ Candidates are required to give their answers in their own words as far as practicable.
- ✓ Attempt All questions.
- ✓ The figures in the margin indicate Full Marks.
- ✓ Assume suitable data if necessary.

1. What are the various factors that influence the choice of a foundation? [2]
2. a) Define the physical meaning of terms with reference to the sampling tube, with a neat sketch-i) Inside clearance ratio ii) Outside clearance ratio iii) Area ratio iv) Recovery ratio. Also indicate the recommended values to get least disturbed samples. [6+2]
 - b) A multistoried commercial complex building is to be constructed in a core of a Kathmandu Valley, for this a Geotechnical investigation is to be carried out. As an engineer recommend the number of boreholes, depth of boreholes and spacing of the borehole for subsoil explorations. [4]
3. a) How the different retaining walls can be proportioned? Describe the methods of stability check of retaining wall. [5+3]
 - b) A retaining wall of 7.5m high has two layers of backfill. The soil supported consists of 3m sand ($\gamma=18\text{KN/m}^3$, $\phi=35^\circ$) overlaying saturated clayey soil ($\gamma=19.5\text{KN/m}^3$, $\phi=35^\circ$, $C=16\text{KN/m}^3$). The ground water table is at the upper surface of the clay. Make a sketch of the distribution of the active pressure on the wall. Calculate the total earth thrust per meter of the wall and its point of application. Assume that the backfill is horizontal at the surface. [8]
4. What is cofferdams? Describe the types of cofferdams with their uses. [1+3]
5. In what respects does the design of bracings in cuts vary from that of a rigid retaining wall? Describe Terzaghi's arching theory. [2+2]
6. a) Critically differentiate between general shear failure and local shear failure. What are the factors affecting bearing capacity of soil? [2+2]
 - b) A rectangular footing (3m x 4m) is placed at 1.5m depth in sandy soil having angle of shearing resistance of 34° and unit weight of 20KN/m^3 above water table and saturated unit weight of 21.5KN/m^3 below water table. Determine the safe load that can be carried by the footing for a safety factor of 3.0 if the excavation is backfilled for the following cases: (i) the water table is at 1m below the ground level and (ii) the water table is at 1m below the base of the footing. The bearing capacity factors for strip footing for $\phi=34^\circ$ are $N_q=29$ and $N_\gamma=41$. [8]
7. A raft foundation is 20m x 30m. The raft is constructed over a soft clay stratum having $C_u=10\text{KN/m}^2$ and $\gamma=19\text{KN/m}^3$. If the live load and dead load on the raft are 100MN, find the depth of Foundation if
 - a) The foundation is fully compensated.
 - b) Determine the depth of foundation for a factor of safety of 3. [3+3]

8. a) Describe Negative skin friction with its causes, effect, preventive measures. [4]

b) The 20 numbers of concrete pile of 0.3m diameter and 20 meter depth are designed to construct 4 x 5 layout pattern. The site consist of clay with unconfined compressive strength 80KN/m^2 . Design center to center spacing of piles so that group pile has some possibility of individual pile failure an block failure. Take adhesion factor (α) = 0.5 [8]

9. What considerations govern the fixing of the depth of a well foundation? Name the different methods to analyze the lateral stability of well foundation. A circular well of 4m internal diameter and 0.75m steining thickness is embedded upto a depth of 12m in a uniform sandy deposit. The well is subjected to a resultant horizontal force of 500kN and a total moment of 4000kN-m at the scour level. Calculate the allowable total equivalent resisting force due to earth pressure for the both light well and heavy well conditions using Terzaghi's analysis. Take saturated unit weight of soil of 20kN/m^3 , $\phi=30^\circ$ and factor of safety for passive resistance of 2. [1+1+6]

10. What are the different methods of improving the foundation soils? [4]

Exam.	Back
Level	BE
Programme	BCE
Year / Part	III / I
Full Marks	80
Pass Marks	32
Time	3 hrs.

Subject: - Foundation Engineering (CE602)

- ✓ Candidates are required to give their answers in their own words as far as practicable.
- ✓ Attempt All questions.
- ✓ The figures in the margin indicate Full Marks.
- ✓ Normal graph paper should be provided.
- ✓ Assume suitable data if necessary.

1. a) How would you select the suitable type of foundation according to soil conditions? [2]
b) Why undisturbed samples are required? [2]
2. a) In a core of a Kathmandu valley a Geotechnical investigation is to be carried out. As an engineer recommend the type of drilling and the suitable field tests such that the test data can be used as much as possible. [5]
b) Prepare an example of borehole log format. [3]
3. a) What mathematical procedures are used in checking the stability of retaining wall? Why are retaining walls usually designed for active earth pressure? [2+6]
b) A trapezoidal masonry retaining wall 1 m wide at top and 3 m wide at its bottom is 4 m high. The vertical face is retaining soil ($\phi = 30^\circ$) at a surcharge angle of 20° with the horizontal. Determine the maximum and minimum intensities of pressure at the base of the retaining wall. Unit weights of soil and masonry are 20kN/m^3 and 24kN/m^3 respectively. Assuming the coefficient of friction at the base of the wall as 0.45, determine the factor of safety against overturning. [8]
4. Explain arching in soils. Explain heave of the bottom of cut in soft clays. [4]
5. Differentiate between rigid retaining structural and flexible retaining structures in terms of stability and deformation analysis. [4]
6. a) Explain how the bearing capacity of soil is affected by the fluctuation of the water table with neat sketch. [6]
b) Below figure shows the load-settlement curve obtained from a plate load test conducted on a sandy soil. The size of the plate used was $30\text{cm} \times 30\text{cm}$. Determine the size of a square column footing to carry a net load of 3200KN with a maximum settlement of 25mm . [8]

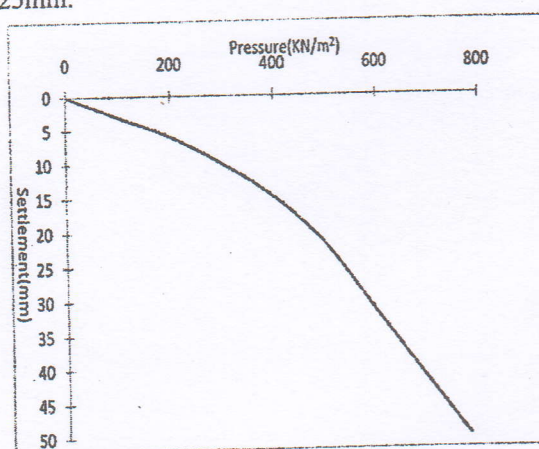


Fig:1 plate load test

7. The $10\text{m} \times 15\text{m}$ size mat is constructed at 2.5m depth having basement for underground parking. The site consists of highly compressible saturated clay having cohesion of 30 KN/m^2 . If the mat carries the total load of 4000 KN. Calculate the factor of safety. [6]
8. a) Elaborate the behavior of single pile differing in its group actions. [4]
- b) A circular pile group of 16 piles penetrates through a unconsolidated soil of 3.5m depth. The diameter of circular pile is 60 cm and pile spacing of 800cm. The average unconfined compressive strength of material is 60 KN/m^2 and the unit weight of soil is 16 KN/m^3 . Compute the negative skin friction on the group. Take adhesion factor = 1. [8]
9. Discuss the remedies for tilt and shift of well foundation. Describe with clear sketches the components of well foundations. [3+5]
10. What are the purposes of foundation soil improvement? Explain, in brief, vibroflotation techniques. [2+2]

Exam.	Regular		
Level	BE	Full Marks	80
Programme	BCE	Pass Marks	32
Year / Part	III / I	Time	3 hrs.

Subject: - Foundation Engineering (CE602)

- ✓ Candidates are required to give their answers in their own words as far as practicable.
- ✓ Attempt All questions.
- ✓ The figures in the margin indicate Full Marks.
- ✓ Assume suitable data if necessary.

1. Classify the shallow and deep foundations according to soil conditions. [2]
2. a) Determine the area ratio of a sampler having external radius of 30 mm and wall thickness of 2.25 mm. Do you recommend this sampler for obtaining undisturbed soil samples and why? [2+1]
- b) List the field tests commonly used in subsurface exploration. What are the corrections that must be applied to the SPT-values for sand before they are used in design charts and empirical correlations? [1+4]
- c) What are the things that you will consider while preparing the site investigation report? [4]
3. a) Explain the relative wall movements and lateral earth pressure coefficients. How do tension cracks influence the distribution of active earth pressure in purely cohesive soils? Distinguish critically between Rankine's and Coulomb's theories of lateral earth pressure. [2+2+2]
- b) A retaining wall of 7.5 m high has two layers of backfill. The soil supported consists of 5m sand ($\gamma = 18 \text{ kN/m}^3$, $\phi = 35^\circ$) overlaying saturated clayey soil ($\gamma = 19.5 \text{ kN/m}^3$, $\phi = 35^\circ$, $C = 16 \text{ kN/m}^2$). The ground water table is at the upper surface of the clay. Make a sketch of the distribution of the active pressure on the wall stating the principal values. Calculate the total earth thrust per meter of the wall and its point of application. Assume that the backfill is horizontal at the surface. [10]
4. What is arching effect in soils? A long 5 m wide and 10 m high vertical trench has to be constructed in a deep deposit of cohesive soil with $c = 35 \text{ kN/m}^2$ and $\gamma = 18 \text{ kN/m}^3$. The safety of the bottom of trench against heave is to be checked before protecting the trench walls using sheet piles. If the excavation to be completed rapidly, determine the factor of safety against bottom heave. What will be the factor of safety if a hard rock is present at 2.5 m from the bottom of the trench? [1+3]
5. What is coffer dam? Describe with neat sketch of the different types of coffer dam. What are the relative merits and demerits of them? [4]
6. a) What are the implications of settlement on structures? Write down the steps of proportioning footings for uniform settlement. [2+4]
- b) A building is to be supported on a reinforced concrete raft covering an area of $14 \text{ m} \times 21 \text{ m}$. The subsoil is clay with an unconfined compressive strength of 14 kN/m^2 . The pressure on the soil due to weight of the building and loads it will carry will be 135 kN/m^2 , at the base of the raft. If the unit weight of excavated soil is 19 kN/m^3 , at what depth should the bottom of the raft be placed to provide a factor of safety of 3? Use Skempton's bearing capacity formula. [6]

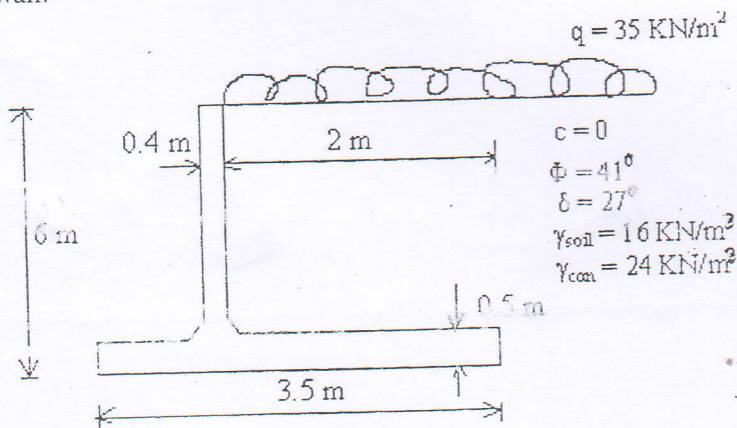
7. Write down the concept of compensated foundation. Describe with sketches the various types of mat foundations. [1+5]
8. a) What are the various approaches used to estimate the vertical load bearing capacity of a pile? Write causes and effects of negative skin friction in a pile foundation. [1+4]
- b) A group of 16 piles arranged in a square pattern is to be proportioned in a deposit of soft saturated clay. Assuming the piles to be square with side 30 cm and 12 m long, determine the centre to centre spacing of piles for 100% efficiency of the pile group. Take adhesion factor = 0.8 and consider both point bearing and skin friction. [7]
9. What are the advantages of well foundations over the other types of deep foundations? Explain about the methods use to rectify tilt and shift of the well foundation with clear sketches. [2+6]
10. Write down the different methods of soil improvement techniques. Explain sand compaction piles and stone column. [2+2]

Exam.	Back		
Level	BE	Full Marks	80
Programme	BCE	Pass Marks	32
Year / Part	III / I	Time	3 hrs.

Subject: - Foundation Engineering (CE602)

- ✓ Candidates are required to give their answers in their own words as far as practicable.
- ✓ Attempt All questions.
- ✓ The figures in the margin indicate Full Marks.
- ✓ Assume suitable data if necessary.

1. a) Classify the foundations according to their soil condition. [2]
- b) Explain how standard penetration test is carried out in the field. What various corrections are made on the tested value? Describe the nature of sample obtained from the test. [8]
- c) Describe briefly the limitations of plate load test. [4]
- d) Write down the different methods of improving the bearing capacity of weak soils. [4]
2. a) Explain with neat sketch the step by step procedure for Culmann's graphical method of passive earth pressure. [6]
- b) Determine the maximum and minimum pressure under the base of the cantilever retaining wall as shown in figure below and also the factor of safety against sliding and overturning. The approximate shear strength parameters for the soil are $c = 0$, $\Phi = 41^\circ$. The unit weight of soil and concrete are 16 KN/m^3 and 24 KN/m^3 respectively. The water table is below the base of the wall. Take $\delta = 27^\circ$ on the base of the wall. [10]



3. a) What is the effect of water table on bearing capacity of soil? A footing was designed based on ultimate bearing capacity arrived for the condition of water table at the ground surface. If there is a chance for raise in water level much above the ground level do you expect any change in the bearing capacity, why? [4]
- b) A circular footing is resting on stiff clay with unconfined compression strength of 250 KN/m^2 . Determine the diameter of the footing when the depth of foundation is 2 m and the column load is 700 KN assuming a factor of safety as 2.5, the bulk unit weight of soil is 20 KN/m^3 . What will be the change in ultimate, net ultimate and safe bearing capacity if the water table is at ground level? [8]

4. a) In what respects does the design of flexible retaining structure vary from rigid retaining structure. [3]
- b) A cantilever sheet pile wall is driven into sand deposit having friction angle 35° and bulk unit weight of 22kN/m^3 . One side of the sheet pile was backfilled to 3 m height. The backfill material is cohesion less sand having $\Phi = 32^\circ$ and bulk unit weight of 18kN/m^3 . Using the simplified method determine the depth of penetration needed for the sheet pile to retain the backfill. Provide a safety factor of 2 for the passive resistance. The water table is below the base of the sheet pile. [5]
5. a) What are the conditions where a pile foundation is more suitable than a shallow foundation? What is a negative skin friction? [3+2]
- b) A group of nine piles, 12 m long and 300 mm in diameter is to be arranged in a square pattern in clay with an average unconfined compressive strength of 75 KN/m^2 . Determine the centre to centre spacing of the piles for the efficiency of 1. Neglect the point bearing. [7]
6. a) How do you determine the depth of the well foundation? Describe the process of sinking of well. [4+4]
- b) Describe the procedure of determining the bearing capacity of cohesive cohesion-less soil in case of mat foundation. What is compensated foundations. [4+2]

Exam.	New Back (2066 & Later Batch)		
Level	BE	Full Marks	80
Programme	BCE	Pass Marks	32
Year / Part	III / I	Time	3 hrs.

Subject: - Foundation Engineering (CE602)

- ✓ Candidates are required to give their answers in their own words as far as practicable.
- ✓ Attempt All questions.
- ✓ The figures in the margin indicate Full Marks.
- ✓ Assume suitable data if necessary.

1. a) What is standard penetration test? Write down its procedure. For what purpose can the result of this test be used? How can the standard penetration values be corrected for dilatancy and over burden pressure? [8]
- b) Explain Terzaghi's trap door experiment with neat sketch. A 8 m deep cut in sand with a cut width of 5 m is braced at equal distance of 2 m from the surface at three locations. In the plan the struts are placed at a spacing of 4 m center to center. Using empirical pressure diagram, calculate the design strut loads if the properties of sand is, angle of shearing resistance of 30° and unit weight of 16 kN/m^3 . [8]
2. a) High steel sheet pile wall with smooth vertical back supports a dry cohesionless soil that weighs 18 kN/m^3 . The backfill rises from the crest of the wall at an angle of 20° with the horizontal. If the angle of internal friction of backfill materials is 30° , determine the magnitude and point of application of active earth pressure per meter length of the wall. What will be the change in its magnitude and point of application, if water table rises to an elevation of 2 m below the top of the wall? Take the submerged unit weight of the backfill material as 12 kN/m^3 . [8]
- b) Describe Culmann's graphical method of finding earth pressure for active state and explain how surcharge will affect earth pressure in active states. [8]
3. a) How do you differentiate whether there will be general or local shear failure at your site? An engineer wants to construct a circular footing of 1 m diameter to transfer the load of 1000 kN with the safety factor of 2.5 to a soil strata with an angle of shearing resistance 30° , cohesion 10 kN/m^2 and unit weight of 18 kN/m^3 . Suggest the engineer what should be the depth of the footing. Take Terzaghi's bearing capacity factors N_c , N_q and N_γ as 37.2, 22.5 and 19.7 respectively. [4+8]
- b) A mat $18 \text{ m} \times 22 \text{ m}$ in plan has its base 3 m below the surface of the deposit of clay with a unit weight of 20 kN/m^3 . The unconfined compressive strength of clay is 75 kN/m^2 . The factor of safety against bearing capacity failure must be 3. Determine total weight of building plus the foundation the raft can safely support. [4]
4. a) Give a method to determine the bearing capacity of a pile in sandy soil. What is group effect and how will you estimate the capacity of a pile group in sand with neat sketch? Explain the application and limitations of pile load test. [10]
- b) A group of 16 piles of 50 cm diameter is arranged with a center to center spacing of 1.0 m. The piles are 90 m long and are embedded in soft clay with cohesion of 30 kN/m^2 . Bearing resistance may be neglected for the piles. Adhesion factor is 0.6. Determine the ultimate load capacity of the pile group. Also check the efficiency of the group of pile. [6]
5. a) What are the conditions that demand the improvement of the soil? Write down the different methods of soil improvement techniques. Write down the measures to be taken for sinking the wells and correcting the tilts and shifts occurred during sinking of caissons. [2+2+4]
- b) Determine the depth of embedment and force in tie rod of an anchored sheet pile wall retaining soil bank of height 5 m. The tie rod is located 1 m below the top of the wall.

Exam.	Regular		
Level	BE	Full Marks	80
Programme	BCE	Pass Marks	32
Year / Part	III / I	Time	3 hrs.

Subject: - Foundation Engineering (CE602)

- ✓ Candidates are required to give their answers in their own words as far as practicable.
- ✓ Attempt All questions.
- ✓ The figures in the margin indicate Full Marks.
- ✓ Assume suitable data if necessary.

1. What are the major criteria to be satisfied in the design of a foundation? [2]
2. a) Differentiate between representative and non-representative soil samples. What are the different sampler design parameters? Explain with their physical meaning (No need to write the formulas) [2+5]
- b) How do you prepare the good site investigation reports? [5]
3. a) What is the earthquake effect on earth pressure? What is the order of horizontal strain required to produce active state in (i) coarse grained soil and (ii) Fine grained soil? What are the tentative dimensions of cantilever retaining walls? [1+2+5]
- b) A retaining wall with a smooth vertical back is 8 m high and retains a 2-layered soil having properties as follows: [8]

Depth (m)	C (KN/m ²)	Φ (degrees)	γ (KN/m ³)
0-4	10	30	18
4-8	0	34	20

Show the active earth pressure distribution on the back of the retaining wall and its resultant.

4. What are the essential requirements for arching effects? Draw the apparent earth pressure design diagrams recommended by Pecketal (1974) for cuts in sands, firm clay and soft to medium clay. [1+3]
5. What are the different types of cofferdams? What are their relative merits and demerits? [2+2]
6. a) What is the difference among immediate settlements, primary consolidation settlement and secondary compression settlement? Explain the limitations of plate load test. [3+3]
- b) A mat foundation of size 8 m×10 m is resting at a depth of 5 m. The foundation is resting on saturated cohesive soil having undrained cohesion of 50 kPa. The soil has unit weight of 19 KN/m³. Find the net safe bearing capacity using Skemton's method. [6]
7. What is compensated foundation? Describe the procedure for the conventional design of raft foundations. [2+4]
8. a) Define negative skin friction in pile. Explain a typical situation where negative skin friction may occur. How does negative skin friction affect load carrying capacity of pile? [4]
- b) A pile group consists of 16 piles is driven into a clay deposit. The piles are arranged in square configuration, i.e 4 piles in each direction. The center to center distances between the piles in both directions are 2.4 m. The length of the pile is 10 m and diameter is 0.8 m. The average undrained shear strength along the upper 5 m length of the pile is 40 KN/m² and the average undrained shear strength along the lower 5 m length of the pile is 60 KN/m². If adhesion factor is 0.6 for both layers, determine the ultimate load capacity of the pile group. [8]
9. Explain with clear sketches the various components of well foundations. What are the different methods to analyze the lateral stability of well foundation? What are the different forces acting on well foundation? [4+2+2]