

INSTITUTE OF ENGINEERING
Examination Control Division

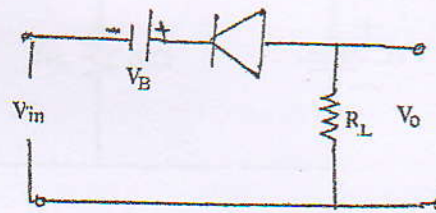
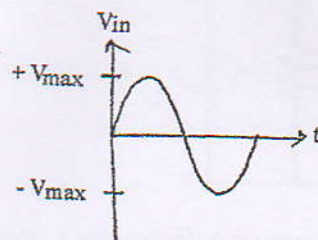
2079 Ashwin

Level	BE	Full Marks	80
Programme	BCE, BEL, BEX, BCT, BME, BAM, BIE, BAG, BGE	Pass Marks	32
Year / Part	I / II	Time	3 hrs.

Subject: - Basic Electronics Engineering (EX 451)

- ✓ Candidates are required to give their answers in their own words as far as practicable.
- ✓ Attempt All questions.
- ✓ The figures in the margin indicate Full Marks.
- ✓ Assume suitable data if necessary.

1. Explain dependent and independent signal sources with suitable symbols and examples. [4]
2. Explain the operation of RC High pass filter with necessary circuit diagram and transfer characteristics curve. [4]
3. Find the output waveform of the given input wave. (Assume diode is ideal). [4]



4. Describe the AC model of semiconductor diode and derive the expression for small signal incremental resistance of the diode. [4]
5. If $V_{cc} = 10V$, $R_B = 900 K\Omega$, $R_C = 2K\Omega$ and $\beta = 150$, calculate the collector current I_C for collector feedback type dc biasing circuit. [5]
6. Explain operation of CMOS NOR with necessary diagram. [5]
7. Explain the operation of BJT as a switch. [6]
8. Design summing amplifier to using Op-Amp to get the output voltage $V_0 = -V_1 + 2V_2 + 3V_3$. [5]
9. Derive output voltage expression for Op-amp integrator and differentiator. [4+4]
10. Draw the circuit diagram of Triangular wave generator and write its frequency of oscillation. [3]
1. Define modulation. Explain Amplitude Modulation (AM) in brief with necessary waveforms and expressions. [1+4]
2. Illustrate block diagram of digital communication system. [4]
3. Perform the following: [4]
 - a) $(573.73)_8 = (?)_{16}$
 - b) $(267.02135)_{10} = (?)_2$
 - c) $(508)_{10} = (?)_{BCD}$
 - d) Subtract $(24)_{10}$ from $(48)_{10}$ using 2's complement method.
- Simplify Boolean Expression by using K-MAP. Also draw circuit. [6]

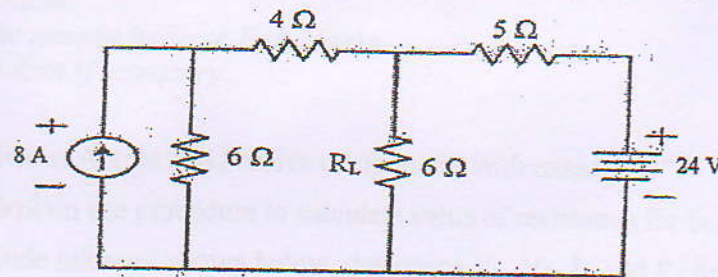
$$F = A'C + A'B + AB'C + BC$$
- Construct T flip-flop with its characteristics table and equation. [5]
- Write short notes on: (Any Two) [2×4]
 - a) Strain gauge
 - b) Regulated power supply
 - c) Digital multimeter

Exam.	Back		
Level	BE	Full Marks	80
Programme	All except BAR	Pass Marks	32
Year / Part	I / II	Time	3 hrs.

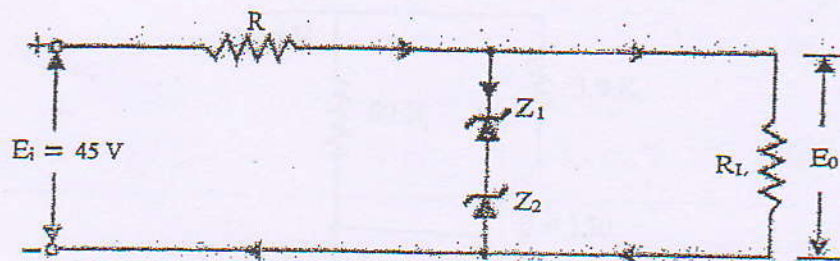
Subject: - Basic Electronics Engineering (EX 451)

- ✓ Candidates are required to give their answers in their own words as far as practicable.
- ✓ Attempt All questions.
- ✓ The figures in the margin indicate Full Marks.
- ✓ Assume suitable data if necessary.

1. Thevenise the following circuit and calculate the current flowing through R_L . [5]



2. Define active and passive components in electronic system. Calculate the value of resistor having color codes YELLOW, VIOLET, ORANGE, GOLD. [4]
3. Explain the operation of RC high pass filter with necessary diagram. [4]
4. Explain forward and reverse characteristics of semiconductor diode with diagrams. [5]
5. Explain large signal models of semiconductor diode with necessary diagrams. [5]
6. Explain the operation of full wave center tapped rectifier with necessary diagrams. [5]
7. The circuit of figure below uses two zener diodes, each rated at 15 V, 200 mA. If the circuit is connected to a 45-volt unregulated supply, determine: (i) The regulated output voltage (ii) The value of series resistance R . [5]



8. Explain common emitter configuration of NPN transistor with its characteristics with necessary diagrams. [5]
9. Calculate the Q point of the voltage divider biasing circuit where $V_{CC} = 15V$, $R_1 = 10K$, $R_2 = 5K$, $R_C = 1K$, $R_E = 2K$ and $\beta = 100$. [5]
10. Explain the operation of N channel enhancement type MOSFET with necessary diagram. [5]
11. Write down the properties of idle op.amp. Design the op amp circuit that produces output $V_o = 4V_1 + 2V_2 - 0.5V_3$. [2+3]
12. Draw the circuit diagram for sine wave oscillator using op-amp. Write the formula for frequency calculation. [3]
13. Simplify the Boolean function using k map and realize the logic circuit.

$F \Sigma(0,1,2,4,5,6,8,9,12,13,14).$

[4+2]

14. Explain the block diagrams of communication system. Write down the advantages of FM over AM. [5]

15. Explain the operation of JK flip flop with necessary diagram. [5]

16. Write short notes on: (Any two) [2x4]

- a) Data logger
- b) DMM
- c) Remote control

[4+2]

FM

[5]

[2×4]

TRIBHUVAN UNIVERSITY
INSTITUTE OF ENGINEERING
Examination Control Division

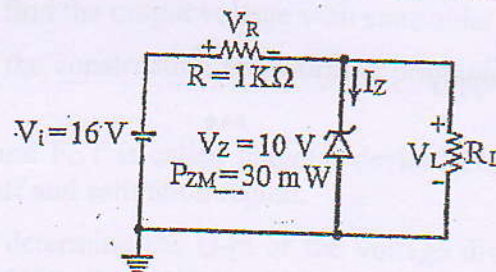
2078 Chaitra

Exam.	Regular		
Level	BE	Full Marks	80
Programme	BCE, BEL, BEX, BCT, BME, BAM, BIE, BAG, BGE, BAS	Pass Marks	32
Year / Part	I / II	Time	3 hrs.

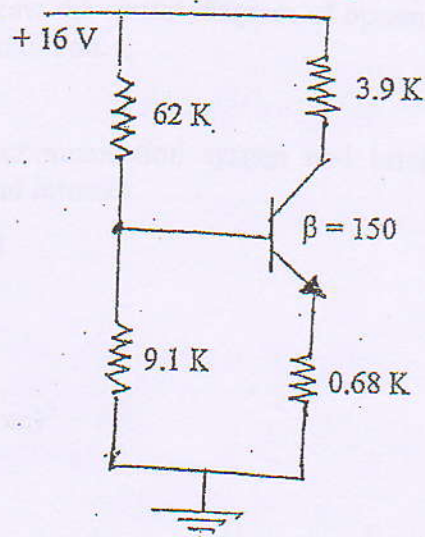
Subject: - Basic Electronics Engineering (EX 451)

- ✓ Candidates are required to give their answers in their own words as far as practicable.
- ✓ Attempt All questions.
- ✓ The figures in the margin indicate Full Marks.
- ✓ Assume suitable data if necessary.

1. Differentiate between Active and Passive components with examples. [3]
2. What is filter? Explain the procedure to calculate value of resistance for band 5. [1+3]
3. For the Zener diode network shown below, determine V_L , V_R , I_Z and P_Z for $R_L = 3 \text{ K}\Omega$. [4]



4. Explain the working principal of full wave Bridge rectifier circuit and define its parameters. [5]
5. Find I_{BQ} , I_{CQ} , V_{CEQ} , I_{Csat} and V_{CEsat} from the given voltage divider circuit. [6]



6. Explain N-channel E-MOSFET operation along with its characteristic curve. [7]
7. Draw the circuit diagram of BJT differential amplifier. [3]
8. Mention any four properties of an ideal op-amp. Derive the expression of voltage gain of an inverting amplifier using op-amp. [2+4]

9. State Barkhausen criteria for oscillation. Draw Wein bridge oscillator circuit to generate sine wave and derive the frequency of the generated sine wave. [2+4]
10. Differentiate between positive and negative feedback system with applications. [4]
11. Describe properties of EMW propagation. Draw structure of Optical fiber. [3+2]
12. Differentiate between Internet and Intranet. [3]
13. Convert the following: [5]
 - a) $(257.24)_8 = (?)_{10}$
 - b) $(3B9)_{16} = (?)_8$
 - c) $(10110)_{\text{Grey}} = (?)_2$
 - d) $(2345.67)_{10} = (?)_{16}$
 - e) Subtract $(49)_{10}$ from $(37)_{10}$ using 2's complement method
14. Describe SR latch with necessary circuit diagram and truth table. [6]
15. Simplify the following Boolean Expression using K-Map and implement the simplified expression using NAND gate only: $F(A, B, C) = \Sigma (0, 1, 2, 5) + D (3, 4, 6)$ [3+2]
16. Write short notes on: (Any Two) [2×4]
 - a) Data logger
 - b) Digital Multimeter
 - c) Regulated power supply

- ✓ Candid
- ✓ Attempt
- ✓ The fig
- ✓ Assume

1. Write th
2. Briefly
High Pa
3. Explain
with nec
4. Draw the
5. What is
MOSFET
6. Why BJT
transistor
7. Draw the
circuit ha
8. Explain v
to get the
9. List out B
and menti
10. Explain W
11. Draw the
Differentia
12. Write shor
 - a) Audio v
 - b) Remote
 - c) Digital
13. Convert the
 - a) (10101)
 - b) (900118)
 - c) $(2AB.5)$
 - d) $(34)_{10} - ($
14. Explain JK
15. Simplify the
gate.

TRIBHUVAN UNIVERSITY
INSTITUTE OF ENGINEERING
Examination Control Division

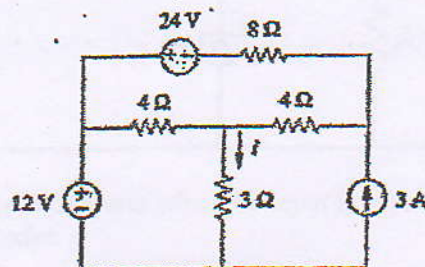
2078 Baishakh

Exam.	Back		
Level	BE	Full Marks	80
Programme	BCE, BEL, BEX, BCT, BME, BAM, BIE, BAG, BGE, BAS	Pass Marks	32
Year / Part	I / II	Time	3 hrs.

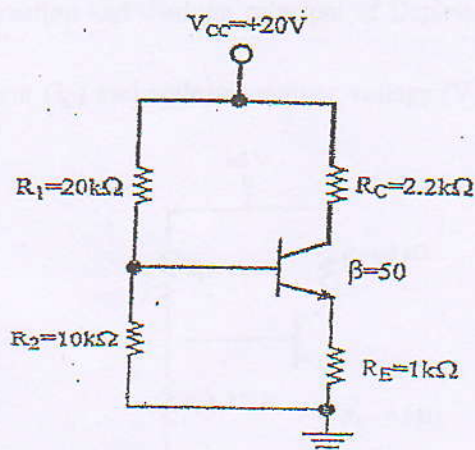
Subject: - Basic Electronics Engineering (EX 451)

- ✓ Candidates are required to give their answers in their own words as far as practicable.
- ✓ Attempt All questions.
- ✓ The figures in the margin indicate Full Marks.
- ✓ Assume suitable data if necessary.

- State the difference between Active and Passive components. Describe the operation of RC high pass filter with necessary diagrams. [1+4]
- Using the principle of superposition, find the current i through the 3Ω resistor in figure below. [5]



- What is diode? Explain large signal model of PN junction diode. [1+5]
- Draw the circuit diagram of differential amplifier using BJT. [2]
- Explain the construction and working principle of Enhancement type N-channel MOSFET with necessary mathematical expression and characteristic curves. [6]
- Determine the collector current (I_C) and collector emitter voltage (V_{CE}) of the following BJT circuit. [5]



- Draw the circuit diagram of CMOS inverter. [3]

8. What do you mean by virtual short circuit in Op-amp. Draw the circuit diagram of differentiating amplifier using op-amp and derive the expression for output voltage. [1+4]
9. Describe the operation of square wave generator using op-amp and find its frequency of oscillation. [5]
10. What is operational amplifier? Explain Wein bridge oscillator. [1+5]
11. Describe communication system in brief with a complete block diagram. [4]
12. Draw and explain the block diagram of data logger and oscilloscope. [4+4]
13. What is Antenna? Discuss the role of Antenna in communication system. [2+2]
14. Convert the following number system into: (Any Three) [3×2]
 - a) $(59.60)_{10} \rightarrow ()_2$
 - b) $(37.FE)_{16} \rightarrow ()_8$
 - c) $(11.011)_2 \rightarrow ()_{10}$
 - d) $(33.25)_8 \rightarrow ()_{10}$
15. Solve using k-map: $F = A'B'C' + B'CD' + A'BCD' + AB'C'$: [6]
16. Explain the operation of JK flip-flop with necessary diagrams and characteristics table. [4]

TRIBHUVAN UNIVERSITY
INSTITUTE OF ENGINEERING
Examination Control Division

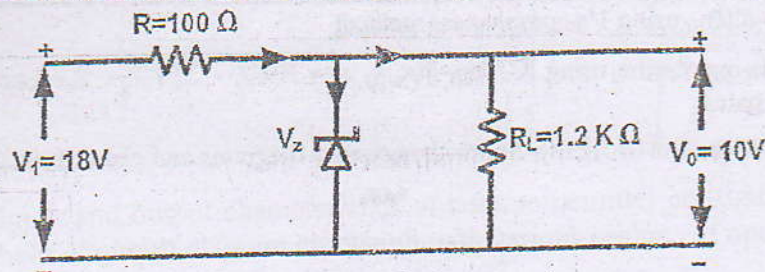
2077 Chaitra

Exam.	Regular	
Level	BE	Full Marks 80
Programme	BCE, BEL, BEX, BCT, BME, BAM, BIE, BAG, BGE, BAS	Pass Marks 32
Year / Part	I / II	Time 3 hrs.

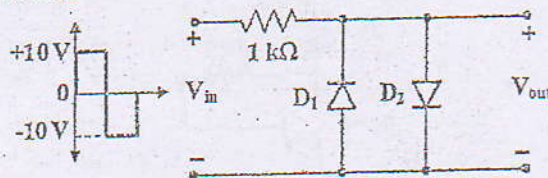
Subject: - Basic Electronics Engineering (EX 451)

- ✓ Candidates are required to give their answers in their own words as far as practicable.
- ✓ Attempt All questions.
- ✓ The figures in the margin indicate Full Marks.
- ✓ Assume suitable data if necessary.

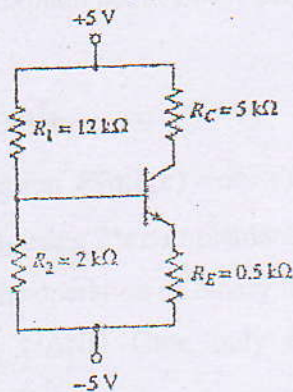
- Write the color coding of the following values of resistors: [4]
 - $47 \pm 5\% \text{ k}\Omega$
 - $548 \pm 10\% \Omega$
- Explain RC low pass filter with necessary derivations and diagrams. [4]
- Find the Zener Current in the given circuit when $R_L = 1.2 \text{ k}\Omega$. Assume $V_Z = 10\text{V}$. [4]



- Find the output voltage waveform when the input is applied to the circuit as shown in the figure using silicon diodes. [4]



- Describe the input and output characteristics of common emitter BJT configuration with the help of circuit diagram and graph with various region of operation. [6]
- Describe the construction and working principal of Depletion MOSFET with necessary diagrams. [5]
- Find collector current (I_C) and collector emitter voltage (V_{CE}) of the BJT circuit given below with $\beta = 100$. [5]



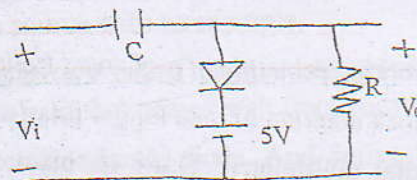
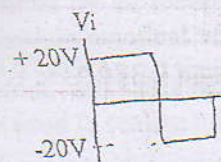
8. List out ideal characteristics of op-amp. Derive voltage gain of non-inverting op-amp configuration. [2+4]
9. Design the summer circuit using operational amplifier. [5]
$$V_0 = V_1 + 2V_2 + 3V_3$$
10. Explain the concept of gain stability. Describe the working principal of square wave generator circuit using operational amplifier. [1+4]
11. Explain the complete block diagram of communication system. [4]
12. What is optical fiber? What are the advantages of optical fibers over traditional communication systems? [1+3]
13. Write short notes on: (Any Two) [2×4]
a) Strain gauge b) Data logger c) Digital multimeter
14. Convert the following: (Any Three) [3×2]
a) $(10101.101)_2 = (?)_{10}$
b) $(9001180)_{10} = (?)_{BCD}$
c) $(2AB.5E)_{16} = (?)_8$
d) $(34)_{10} - (12)_{10}$ using 1's complement method.
15. Simplify the expression using K-Map, $F(x, y, z) = X'YZ + X'Y'Z + XYZ$ and realize it using logic gates. [6]
16. Explain the operation of JK flip-flop with necessary diagrams and characteristics table. [4]

Exam.	BE	Full Marks	80
Level	BE	Pass Marks	32
Programme	All (Except BAR)	Time	3 hrs.
Year / Part	I / II		

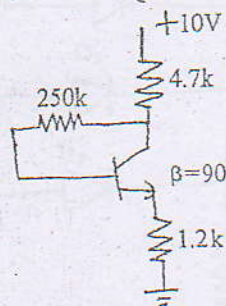
Subject: - Basic Electronics Engineering (EX 451)

- ✓ Candidates are required to give their answers in their own words as far as practicable.
- ✓ Attempt All questions.
- ✓ The figures in the margin indicate Full Marks.
- ✓ Assume suitable data if necessary.

1. Define dependent or controlled source. Briefly explain its type with suitable examples. [5]
2. Differentiate between active and passive components. [3]
3. Explain the operation of Varactor diode with its characteristic curve. [5]
4. Sketch V_o for given network. Assume diode is made of silicon. [5]



5. Describe the input and output characteristics of common emitter configuration circuit of BJT with the help of circuit diagram and graph with various regions of operation. [6]
6. Determine Quiescent levels of I_{CQ} and V_{CEQ} for the network. [6]



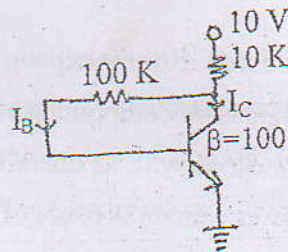
7. Derive the expression of output voltage for integrator and differentiator using op-amp. [5]
8. State the Barkhausen Criteria for oscillation. Show how square wave is generated using Op-amp. [2+6]
9. What is electromagnetic wave? Explain about EMW propagation. [1+3]
10. Differentiate between: [3+3]
 - a) Internet and Intranet
 - b) Broadcasting and Communication
11. Using K-map simplify the expression $F(a,b,c) = \bar{a}bc + b\bar{c} + a\bar{b}c + \bar{a}bc$ [4]
12. Subtract $(11100)_2$ from $(10011)_2$ using 2's complement method. [3]
13. Define Demultiplexer. Explain the operation of binary to octal decoder. [6]
14. Construct S-R flip-flop using NAND Gate only and explain the operation with characteristic table. [6]
15. Draw a basic block diagram of oscilloscope and explain its function. [5]
16. Write short notes on: (Any one) [3]

13. Obtain the simplified expression for the following boolean function using K-Map.

$$F(x, y, z) = \sum m(0, 2, 4, 5, 6)$$

14. Construct clocked SR flip-flop with its characteristics table and equation.

15. For the circuit given below determine I_B , I_C and V_{CE} .



16. Explain the working principle of n-channel Enhancement type MOSFET.

17. Explain the block diagram of data logger briefly.

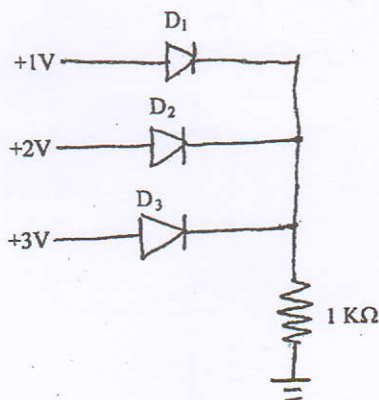
18. What is a digital multimeter? Draw its block diagram and explain how it measures resistance.

Exam.	Regular		
Level	BE	Full Marks	80
Programme	All (Except B.Arch.)	Pass Marks	32
Year / Part	I / II	Time	3 hrs.

Subject: - Basic Electronics Engineering (EX451)

- ✓ Candidates are required to give their answers in their own words as far as practicable.
- ✓ Attempt All questions.
- ✓ The figures in the margin indicate Full Marks.
- ✓ Assume suitable data if necessary.

1. What do you mean by an ideal voltage source? Why is this voltage source practically unrealizable? Explain practical voltage source with an example. [1.5+1+1.5]
2. Why are resistors, inductors and capacitors called passive elements? How can these components be used to realize a filter circuit that passes high frequency signals only? [1+3]
3. Describe the small signal model of semiconductor diode. And derive the expression for dynamic resistance r_d . [6]
4. Assuming diodes used in the circuit are ideal. Find current through $1\text{ K}\Omega$ resistor. [4]



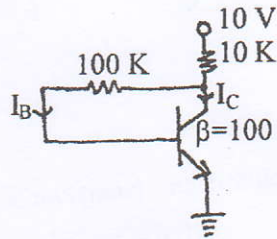
5. Design Op-amp circuit to get output $V_0 = 0.5V_1 - 2V_2 - V_3$. Here V_1 , V_2 and V_3 are three input voltage source. [4]
6. Explain the working of triangular wave generator with necessary diagram. [5]
7. Draw the circuit diagram of Wien bridge Oscillator. Write frequency of Oscillation. [3]
8. Explain the need of modulation in a communication system. [3]
9. Explain the block diagram of optical fibre communication and explain the advantages of optical communication over copper cable communication. [6]
10. Convert the following numbers as indicated. [1.5×2]
 - a) $(EIA)_{16} = ()_8$ b) $(35.7)_{10} = ()_2$
11. State and prove De-Morgan's Theorems. [3]
12. Define encoder. Explain the operation of octal to binary encoder with logical diagram. [6]

13. Obtain the simplified expression for the following boolean function using K-Map. [3]

$$F(x, y, z) = \sum m(0, 2, 4, 5, 6)$$

14. Construct clocked SR flip-flop with its characteristics table and equation. [5]

15. For the circuit given below determine I_B , I_C and V_{CE} . [2+2+2]



16. Explain the working principle of n-channel Enhancement type MOSFET. [6]

17. Explain the block diagram of data logger briefly. [4]

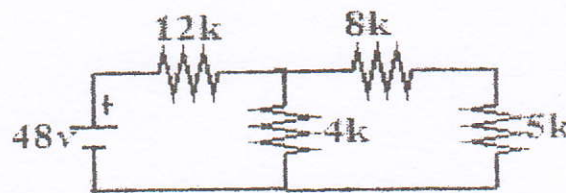
18. What is a digital multimeter? Draw its block diagram and explain how it measures resistance. [1+4]

Exam.	Back		
Level	BE	Full Marks	80
Programme	All (Except B. Arch)	Pass Marks	32
Year / Part	I / II	Time	3 hrs.

Subject: - Basic Electronics Engineering (EX451)

- ✓ Candidates are required to give their answers in their own words as far as practicable.
- ✓ Attempt All questions.
- ✓ The figures in the margin indicate Full Marks.
- ✓ Assume suitable data if necessary.

1. Determine V_{th} , R_{th} and the current through $5\text{ K}\Omega$ resistor using Thevenin's theorem. [4]



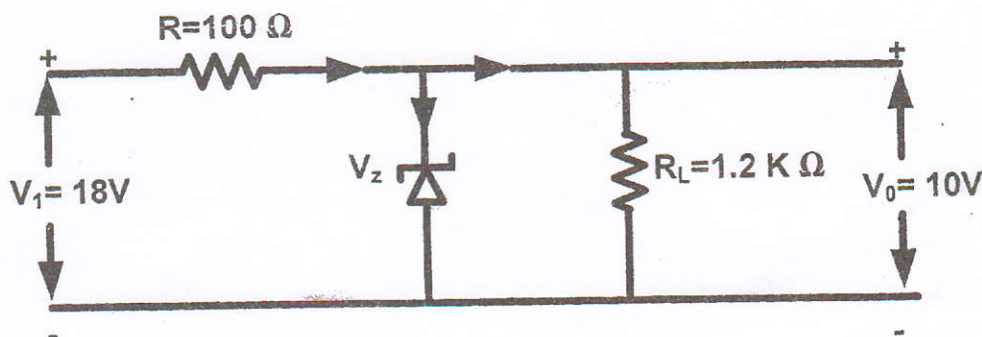
2. What do you mean by a filter circuit? Explain the operation of RC low pass filter with its transfer function and frequency response. [4]
3. Explain large signal models of PN junction diode. [4]
4. Explain the working principle of full wave bridge rectifier with necessary diagrams and expressions. [4]
5. Draw the DC load line and determine the Q point of the voltage divider biased transistor circuit having $V_{CC} = 20\text{V}$, $R_C = 2\text{K}$, $R_1 = 20\text{k}$, $R_2 = 10\text{k}$, $R_E = 4\text{k}$, $\beta = 100$. [6]
6. Describe the construction and working principle of n-channel depletion type MOSFET with necessary diagrams. [6]
7. Explain the operation of CMOS inverter with necessary diagram. [4]
8. Describe the working principle of square wave generator circuit using operational amplifier. [4]
9. What do you mean by virtual short circuit in OP amp? Draw the circuit diagram of the inverting integrator and show that the output is proportional to the time-integral of the input. [2+2+2]
10. State Barkhausen criteria for oscillation. Draw Wein bridge oscillator circuit to generate sine wave and derive the frequency of the generate sine wave. [2+2+2]
11. Explain working principle of optical fiber. List out the advantages of optical fiber communication over copper cable communication. [2+4]
12. Write short notes: (any two) [2×3]
- i) Data Logger
 - ii) Digital Multimeter (DMM)
 - iii) Regulated Power Supply
13. What is an antenna? Explain any two properties of the antenna. [2+2]
14. Simplify the expression using K-Map, $F(A,B,C) = A'B + BC' + AC'$. [4]
15. Explain the operation of JK flip-flop with necessary diagrams and characteristic table. [6]
16. What is multiplexer (MUX) Explain 4:1 Multiplexer. [6]

Exam.	Regular		
Level	BE	Full Marks	80
Programme	All (Except B. Arch)	Pass Marks	32
Year / Part	I / II	Time	3 hrs.

Subject: - Basic Electronics Engineering (EX451)

- ✓ Candidates are required to give their answers in their own words as far as practicable.
- ✓ Attempt All questions.
- ✓ The figures in the margin indicate Full Marks.
- ✓ Assume suitable data if necessary.

1. What is Active and Passive Component? Define transconductance and voltage gain with reference to BJT. [2+4]
2. Draw the circuit diagram of RC High pass filter and explain its operation with the help of frequency dependent response at the output. [5]
3. Find the Zener Current in the given circuit when $R_L = 1.2 \text{ K}\Omega$. Assume $V_Z = 10 \text{ V}$. [5]



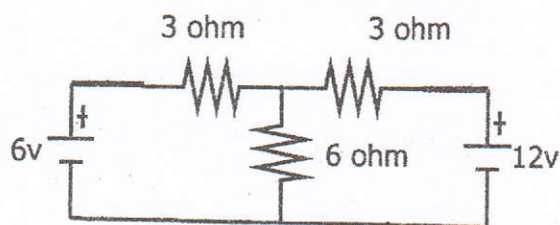
4. What is clipper and clamper circuit? [2]
5. Draw emitter feedback bias circuit of BJT by labeling all the circuit components. Find I_C and V_{CE} in the circuit if $V_{CC} = +12 \text{ V}$, $R_B = 430 \text{ k}\Omega$, $R_C = 2 \text{ k}\Omega$, $R_E = 1 \text{ k}\Omega$ and $\beta = 50$. [2+4]
6. Draw the circuit diagram of differential amplifier using BJT. [2]
7. Describe the working principle of n-channel enhancement type MOSFET. [6]
8. Mention any four properties of ideal Op-amp. Derive the expression of voltage gain of non-inverting amplifier using Op-amp. [2+4]
9. State Barkhausen criteria. Draw the circuit diagram of square wave generator and explain how it works. [2+4]
10. Draw the circuit diagram of Wien Bridge oscillator. [4]
11. Differentiate between following communication systems. [3+3]
 - i) Wired and wireless communication system
 - ii) Broadcasting and communication
12. What are the advantages and disadvantages of optical communication system? [4]
13. Write short notes on: (any two) [2×3]
 - i) Oscilloscope
 - ii) Data logger
 - iii) Regulated power supply using IC
14. State DeMorgan's theorem. Subtract $(1111)_2$ from $(1110)_2$ using 2's complement method. [3+3]
15. Simplify an expression $F(A,B,C,D) = \sum(1,3,7,9,11,14,15)$ by using K-map. [4]

Exam.	Regular		
Level	BE	Full Marks	80
Programme	All (Except B.Arch.)	Pass Marks	32
Year / Part	I / II	Time	3 hrs.

Subject: - Basic Electronics Engineering (EX451)

- ✓ Candidates are required to give their answers in their own words as far as practicable.
- ✓ Attempt All questions.
- ✓ The figures in the margin indicate Full Marks.
- ✓ Assume suitable data if necessary.

1. Describe different types of controlled source with figures. [4]
2. Calculate the current flowing in each branch using superposition theorem. [6]



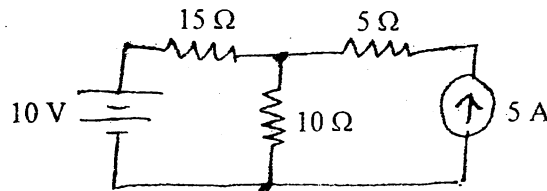
3. Describe the rectification process. Explain the operation of half wave rectifier with necessary diagrams. [1+4]
4. What is diode clamper? Describe the operation diode clamper circuit. [1+4]
5. Draw the DC load line and determine the Q point of the voltage divider biased transistor circuit having $V_{cc} = 15v$, $R_c = 1k\Omega$, $R_1 = 10 k\Omega$, $R_2 = 5k\Omega$, $R_e = 2k\Omega$ and $\beta = 75$. [6]
6. Why BJT is a bipolar and MOSFET is an unipolar device? And draw the circuit diagram of differential amplifier using BJT. [2+2]
7. Explain the operation of CMOS switch with necessary diagrams. [4]
8. Mention any four properties of an ideal OP amp. Derive the expression of voltage gain of an inverting amplifier using OP amp. [2+4]
9. Draw a circuit diagram of square wave generator using OP amp. Explain how it generates the square wave. Express the frequency of the square wave generated. [2+3+1]
10. What is Optical fiber? Explain the advantages of optical fiber communication over coaxial cable communication. [1+3]
11. Define communication system. And describe communication system in brief with the complete block diagram. [2+3]
12. Simplify the expression using K-Map, $F(x,y,z) = X'YZ + X'Y'Z + XYZ$ and realize it using logic gates. [5]
13. Mention the types of flip flops and explain the operation of J-K flip flop with necessary diagrams. [1+4]
14. Draw a block diagram of digital multimeter. Explain how it measures dc current flowing through it. [5]
15. Draw and explain the block diagram of data logger. [4]
16. Write short notes on: (any two) [2×3]
 - a) Light emitting diode
 - b) Output characteristics of common base configuration

Exam.	Regular / Back		
Level	BE	Full Marks	80
Programme	All (Except B.Arch.)	Pass Marks	32
Year / Part	I / II	Time	3 hrs.

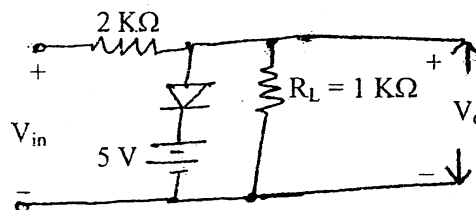
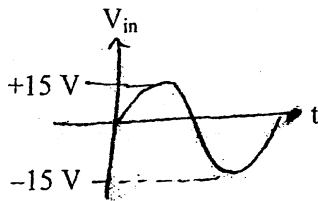
Subject: - Basic Electronics Engineering (EX451)

- ✓ Candidates are required to give their answers in their own words as far as practicable.
- ✓ Attempt All questions.
- ✓ The figures in the margin indicate Full Marks.
- ✓ Assume suitable data if necessary.

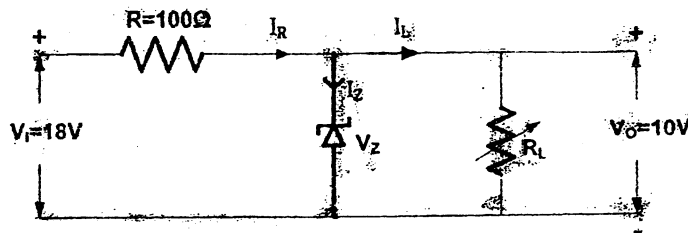
1. Define active and passive circuit component. Determine the color code of the following resistor $75 \text{ K}\Omega \pm 10\%$. [2+2]
2. Determine the current through 10Ω resistance using Thevenin's theorem. [4]



3. What is a filter? Explain the types of filter with necessary diagrams. [1+3]
4. Explain large signal models of PN junction diode. [4]
5. Define clipping circuits. Draw the output waveform of circuit shown below. Assume real silicon diode. [2+2]



6. Find the Zener current in the given circuit when $R_L = 1.2 \text{ K}\Omega$. Assume $V_Z = 10 \text{ V}$. [4]



7. Explain the common emitter configuration circuit of npn transistor with the help of input and output characteristics. [6]

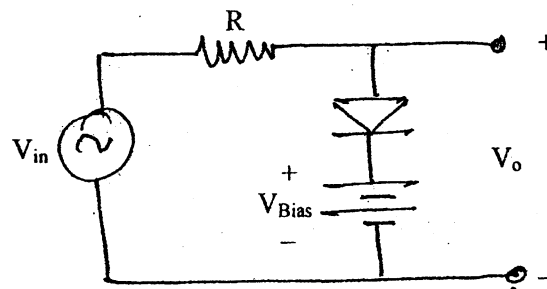
8. Explain the working principle of N channel depletion type MOSFET with necessary diagrams. [6]
9. State any four properties of an ideal op-amp. Design a summing amplifier using Op-Amp to get the output voltage $V_0 = -V_1 + 2V_2 + 3V_3$. [2+3]
10. Explain how square wave can be generated using Op-Amp and write the relation for frequency of oscillation. [4+1]
11. Define communication system and draw the complete block diagram of communication system. [2+3]
12. What is optical fiber? Explain the advantages of optical fiber communication over traditional communication system. [2+3]
13. Simplify the expression using K-map, $Y = A'BC' + ABC' + ABC$. [3]
14. Explain the operation of SR-flip flop with necessary diagrams and characteristics table. [6]
15. (a) $(10101.101)_2 = (?)_{10}$ (b) $(9001180)_{10} = (?)_{BCD}$ (c) $(2AB.5E)_{16} = (?)_8$ [1×3]
16. What is instrumentation system? Explain the instrumentation system with the help of simple block diagram. [1+3]
17. Write short notes of any two: [2×4]
 - a) Data Logger
 - b) DMM
 - c) Strain Gauge

Exam.	New Back (2066 & Later Batch)		
Level	BE	Full Marks	80
Programme	All Except (B.Arch.)	Pass Marks	32
Year / Part	I / II	Time	3 hrs.

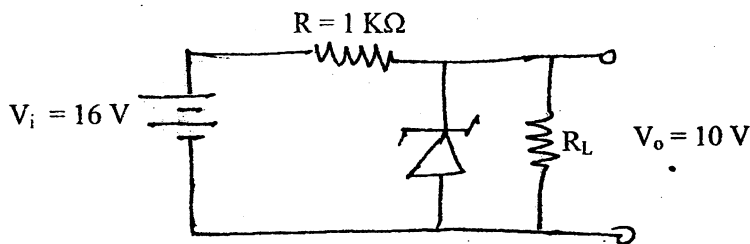
Subject: - Basic Electronics Engineering (EX451)

- ✓ Candidates are required to give their answers in their own words as far as practicable.
- ✓ Attempt All questions.
- ✓ The figures in the margin indicate Full Marks.
- ✓ Assume suitable data if necessary.

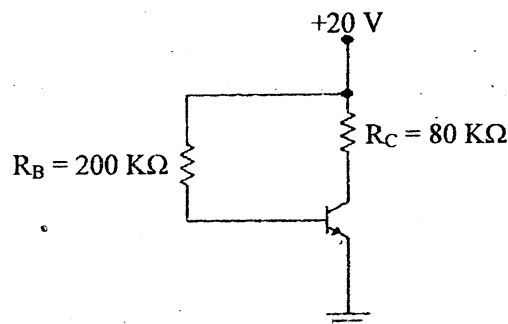
1. What do you mean by filter? Explain the RC low pass and high pass filter with corresponding transfer function and magnitude. [1+4]
2. State Thevenin's Theorem. Write down the steps for determining V_{th} and R_{th} with necessary circuit diagrams. [1+4]
3. What is rectification? Explain the operation of half wave rectifier with necessary diagrams. [1+4]
4. What are clippers? Draw the sinusoidal waveform of the following circuit and indicate the output voltage. Assume diode is ideal. [1+4]



5. Find the zener current from the given zener diode network when $R_L = 3\text{ K}\Omega$ and $V_o = 10\text{ V}$. [5]



6. For the given circuit with $\beta = 75$, determine I_B , I_C and V_{CE} . [2+2+2]



7. Explain the construction and working principle of enhancement type MOSFET? [6]
8. Explain the concept of feedback theory. Describe the working principal of square wave oscillator circuit using op-amp. [2+4]
9. State any 4 important properties of ideal Op-Amp. Draw the circuit diagram of differentiator using Op-Amp and show that output is the differentiation of input signal. [2+4]
10. What is modulation? Explain AM and FM modulated wave. [1+2+2]
11. What do you mean by electromagnetic waves? How are they propagated? Explain. [2+3]
12. Perform the following: [4×1]
 - a) $(375.37)_8 = (?)_{16}$
 - b) $(169.03125)_{10} = (?)_2$
 - c) $(905)_{10} = (?)_{BCD}$
 - d) Subtract $(25)_{10}$ from $(49)_{10}$ using 2'S complement method
13. Simplify the following Boolean expression using K-map and realize it by using universal gate of your interest. [3+2]

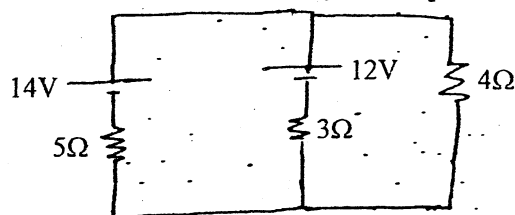
$$F(x, y, z) = xy + \bar{x}z + yz$$
14. Explain SR flip-flop with circuit. [4]
15. What is instrumentation system? Describe the instrumentation system with block diagram. [4]
16. Explain briefly about remote control or digital multimeter with necessary diagrams. [4]

Exam.	Regular		
Level	BE	Full Marks	80
Programme	All (Except B.Arch.)	Pass Marks	32
Year / Part	I / II	Time	3 hrs.

Subject: - Basic Electronics Engineering (EX451)

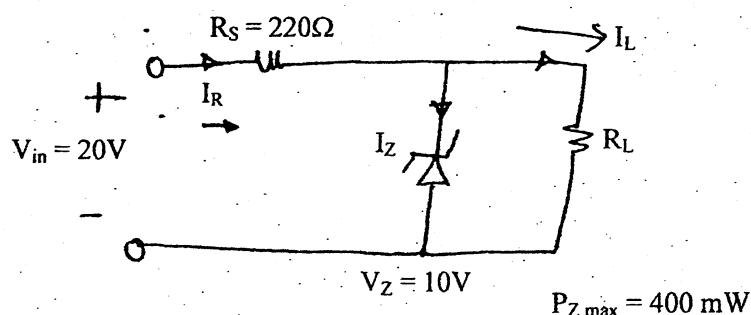
- ✓ Candidates are required to give their answers in their own words as far as practicable.
- ✓ Attempt All questions.
- ✓ The figures in the margin indicate Full Marks.
- ✓ Assume suitable data if necessary.

1. State superposition theorem. In the following figure find the current flow in 4 ohm resistor using superposition theorem. [2+4]



2. Explain the principle of operation of RC low pass filter with necessary diagrams and derivation. [4]
3. Explain the working principle of full wave bridge rectifier circuit with the help of necessary circuit diagrams and expressions. [6]
4. Determine V_L , I_L , I_Z and I_R for the network shown in figure below for following condition. [3+3]

- a) If $R_L = 180 \Omega$
b) If $R_L = 470 \Omega$



5. Define DC load line? Explain the common emitter configuration circuit with the help of input and output characteristics curve. [2+4]
6. Explain the construction and working principle of MOSFET. [6]
7. Write the four properties of ideal operational amplifier. ✓ [2+4]
8. Explain how square wave can be generated using Op-Amp. [6]

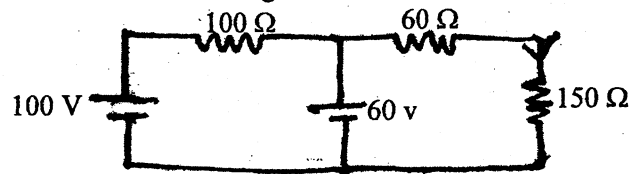
9. Define communication system. Explain amplitude modulation communication system with the help of necessary block diagrams. [6]
10. Discuss the role of antenna in communication system. What are the advantages and disadvantages of optical fiber communication? [2+4]
11. Draw the circuit of X-OR gate using NAND gates only. Perform the subtraction using 2's complement method. [2+2]
 $42_{(10)} - 115_{(10)}$
12. Simplify the expression using k-map [4]
 $F(x, y, z) = xyz + x'y'z + xy'z' + x'y'z' + x'yz$
13. Discuss the operation of S-R flip flop. [4]
14. Write short notes: (any two) [5×2]
- a) Clipper circuit
 - b) Strain gauge transducer
 - c) Data logger

Exam.	New Back (2066 & Later Batch)		
Level	BE	Full Marks	80
Programme	All (Except B.Arch)	Pass Marks	32
Year / Part	I / II	Time	3 hrs.

Subject: - Basic Electronics Engineering (EX451)

- ✓ Candidates are required to give their answers in their own words as far as practicable.
- ✓ Attempt **All** questions.
- ✓ The figures in the margin indicate **Full Marks**.
- ✓ Assume suitable data if necessary.

1. Find the current I in $150\ \Omega$ resistor using thevenius theorem. [6]



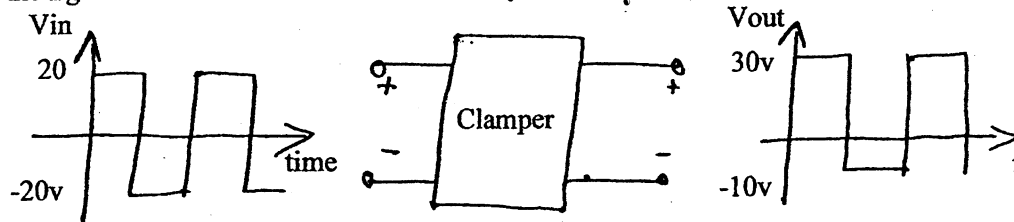
2. Find the value of resistor from following colour code. [2]

a) Red Orange Green Silver b) Yellow Black Gold Gold

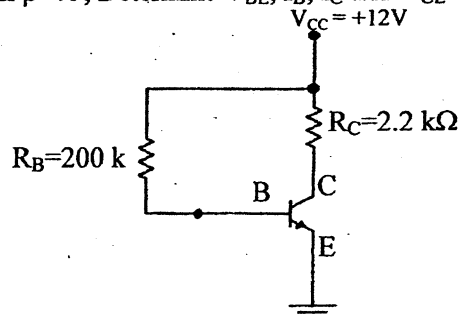
3. Explain the operation of RC high pass filter circuit with the help of necessary diagrams and figures. [4]

4. Describe IV characteristics of PN Junction diode. [6]

5. What is a clamper circuit? Design a clamper circuit to perform the function indicated in the figure below. [2+4]



6. For the given circuit with $\beta=75$, Determine V_{BE} , I_B , I_C and V_{CE} . [6]



7. Explain how BJT can be used as a switch. What are the difference between MOSFET and BJT? [4+2]

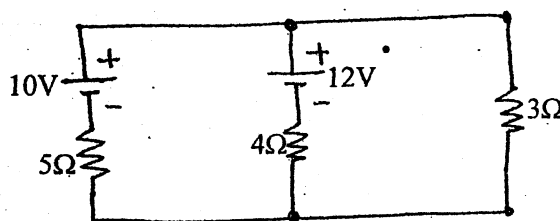
8. Explain the concept of virtual ground in op-amp. Design a summer circuit using op-amp to get the output voltage as: $V_0 = -(V_1 + 10V_2 + 25V_3)$ [2+4]
9. How do you define positive feedback? Draw the circuit for Wein bridge oscillator and explain the principle of operation. [2+4]
10. What are the advantages of optical fiber communication system? Draw and label the diagram of optical fiber. [3+3]
11. Explain why modulation is needed in Communication System. Mention any three parameters of antenna. [3+3]
12. Simplify the given function using K-map method. $F(A, B, C) = \Sigma (0, 1, 2, 5) + D (3, 4, 6)$ and implement the simplified circuit using NAND only. [3+3]
13. What is the difference between combinational and sequential circuit. Discuss JK flip-flop with the help of logic diagram. [2+6]
14. Write short notes on: (any two) [3×2]
- a) Data logger
 - b) Regulated power supply
 - c) Digital Multi-meter

Exam.	Regular (2066 & Later Batch)		
Level	BE	Full Marks	80
Programme	All (Except B, Arch)	Pass Marks	32
Year / Part	I / II	Time	3 hrs.

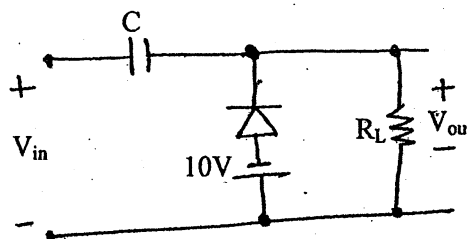
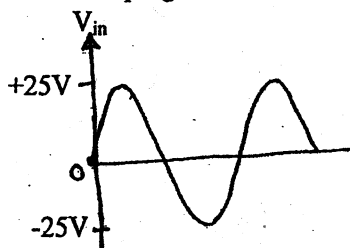
Subject: - Basic Electronics Engineering (EX451)

- ✓ Candidates are required to give their answers in their own words as far as practicable.
- ✓ Attempt All questions.
- ✓ The figures in the margin indicate Full Marks.
- ✓ Assume suitable data if necessary.

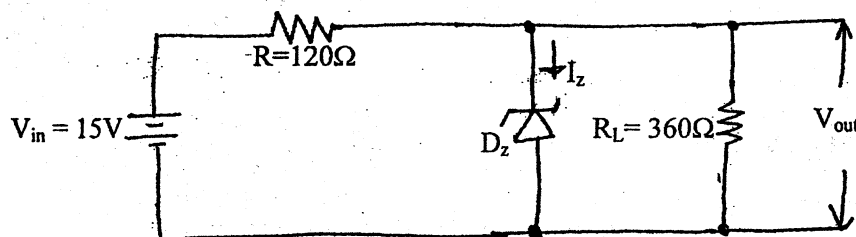
1. Define transconductance and voltage gain with reference to BJT. [3]
2. Draw RC high pass filter circuit and its characteristics graph. [2]
3. Find current flow in 3Ω resistance. Use superposition theorem to solve the problem. [5]



4. What is clamping circuit? Find the output waveform of the given circuit. [1+3]



5. Deduce AC resistance of PN junction diode at forward biased region. [3]
6. Draw bridge rectifier circuit and its output waveform. Assume input is Sinewave voltage. [3]
7. Find I_z , assuming $V_z = 9V$. [3]



8. Find the volume of collector current, Q-point, DC load line for common emitter circuit having $V_{CC} = 15V$, $R_C = 10K\Omega$, $I_B = 10\mu A$ and $\beta = 50$. [5]

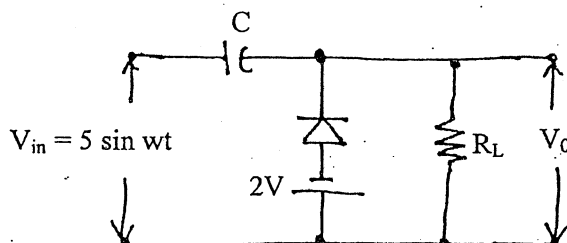
9. Draw the circuit diagram and I-V characteristic curve to investigate output static characteristics of common emitter amplifier configuration. [3]
10. Describe the operation of CMOS NOT-gate circuit. [4]
11. State four important properties of ideal op-amp. Draw the circuit diagram of a differentiator using op-amp and show that the output is the derivative of the input. [2+4]
12. Describe the operation of Wien bridge RC-sinewave Oscillator. State Barkhausen criteria. [4+2]
13. Draw the block diagram of communication system and explain each block. [4]
14. Define amplitude modulation and frequency modulation and draw the necessary waveforms. [2+3]
15. State DeMorgan's theorems with example in each case. [4]
16. a) Verify the following: [2+2]
 - i) $AB + \bar{A}C = (A+C)(\bar{A}+B)$ ii) $XY + \bar{X}Z + YZ = XY + \bar{X}Z$
 - b) Find: $(15)_{10} - (20)_{10} = ?$, use 2's complement method. [2]
17. Draw and explain the block diagram of data logger and remote control. [5+5]
18. Define encoder . Draw truth tables of NAND and XOR gates. [2+2]

Exam.	Regular		
Level	BE	Full Marks	80
Programme	All (Except B.Arch.)	Pass Marks	32
Year / Part	I / II	Time	3 hrs.

Subject: - Basic Electronics Engineering

- ✓ Candidates are required to give their answers in their own words as far as practicable.
- ✓ Attempt All questions.
- ✓ The figures in the margin indicate Full Marks.
- ✓ Assume suitable data if necessary.

- What do you mean by a filter circuit? Explain in brief about RC high pass filter. [1+3]
- Define capacitance. Find the equivalent capacitance when two capacitors of capacitance C_1 and C_2 are connected in series. [1+3]
- Explain the small signal model of PN junction diode and derive the expression for AC or dynamic resistance. [8]
- What is a clipper circuit? Find the output waveform for the following circuit. [1+3]



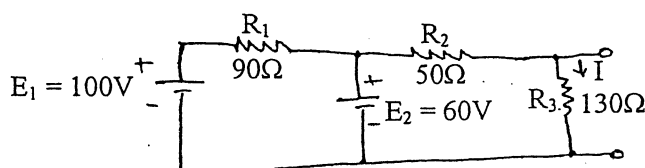
- In BJT circuit if $V_{CC} = 10V$, and $R_C = 8k\Omega$, draw the dc load line. Determine the Q-point (operating point) for zero input signal if $I_B = 15\mu A$ and $\beta = 40$. [8]
- Why BJT is a bipolar and MOSFET is a unipolar device? And draw the circuit diagram of differential amplifier using BJT. [2+2]
- Design the summing amplifier using Op-Amp to get the output voltage: $V_o = 3V_1 + 2V_2 + V_3$. [6]
- Explain how square wave can be generated using Op-Amp and write the relation for frequency of oscillation. [4]
- Define communication system and draw the complete block diagram of communication system. [2+4]
- What is optical fiber? Write short notes on optical fiber. [1+3]
- Explain the working principle of n-channel Enhancement type MOSFET. [7]
- Subtract $(111)_2$ from $(110)_2$ using 2's complement method. Draw the circuit of AND gate using NOR gates only. [3+3]
- Explain the operation of SR-flip flop with necessary diagrams and characteristic table. [6]
- Write short notes on: (any three) [3×3]
 - Regulated power supply.
 - Transducer
 - Oscilloscope
 - Data logger

Exam.	Regular / Back		
Level	BE	Full Marks	80
Programme	All (Except. B. Arch)	Pass Marks	32
Year / Part	I / II	Time	3 hrs.

Subject: - Basic Electronics Engineering

- ✓ Candidates are required to give their answers in their own words as far as practicable.
- ✓ Attempt All questions.
- ✓ The figures in the margin indicate Full Marks.
- ✓ Assume suitable data if necessary.

1. a) Describe the principle of Thevenins theorem by solving following problem. [7]



Find the current I in R_3 .

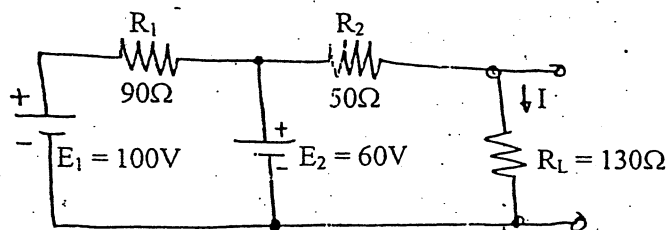
- b) Draw the circuit diagram of RC low filter and explain its operation with the help of frequency dependent output waveform. [7]
2. a) Draw and explain the I-V characteristics curve of P-N junction diode for forward and reverse bias region. [7]
- b) Draw Zener voltage regulator circuit and explain clearly the working principle of this circuit to produce a regulated dc output. [7]
3. a) Describe output characteristics of common emitter configuration with the help of circuit diagram and IV characteristics graph. [7]
- b) Describe the construction and working principle of N Channel E-MOSFET. [7]
4. a) State four important properties of ideal op-amp. Draw the circuit diagram of differentiating amplifier using op-amp and derive the expression for V_{out} . [2+5]
- b) i) Draw the circuit diagram of Wien Bridge oscillator circuit for sinusoidal wave form. [4+3]
ii) Draw square wave oscillator circuit.
5. a) Perform the conversion of the following: [6]
- i) $(10111.101)_2 = (?)_{10}$
ii) $(AFC.00)_{16} = (?)_8$
iii) $(901)_{10} = (?)_{BCD}$
- b) Simplify the expressions and draw the circuits [6]
- i) $\bar{A}\bar{B}\bar{C} + \bar{A}\bar{B}C + A\bar{B}\bar{C} + AB\bar{C}$
ii) $A\bar{C} + ABC + A(C+A\bar{C})$
6. Write short notes on any two: [2×6]
- a) Strain Gauge
b) $\lambda/2$ Dipole Antenna
c) Transducer
d) Amplitude Modulation (AM)

Exam.	New Back (2066 Batch Only)		
Level	BE	Full Marks	80
Programme	All (Except B.Arch.)	Pass Marks	32
Year / Part	I / I	Time	3 hrs.

Subject: - Basic Electronics Engineering

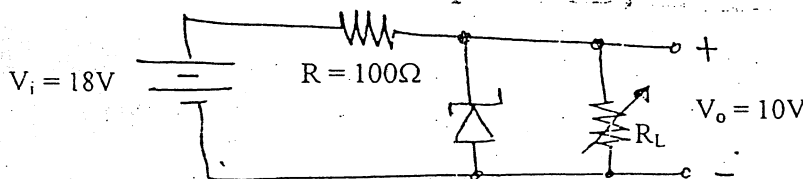
- ✓ Candidates are required to give their answers in their own words as far as practicable.
- ✓ Attempt All questions.
- ✓ The figures in the margin indicate Full Marks.
- ✓ Assume suitable data if necessary.

1. a) Describe the principle of superposition theorem by solving following problem. [5]



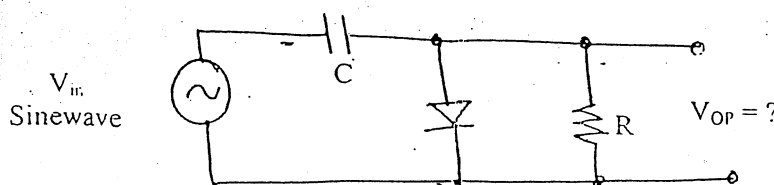
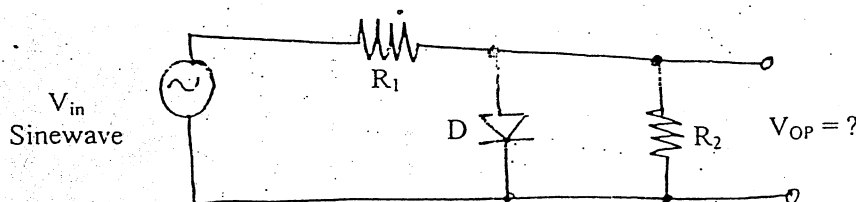
Find current I through R_L .

- b) Explain the concept of voltage gain and transconductance using block diagram. [3]
2. a) Describe the working principle of PN junction diode with the help of circuit diagram and its IV characteristics graph. [3]
- b) Find zener current in the given circuit when $R_L = 1.2k\Omega$. [3]

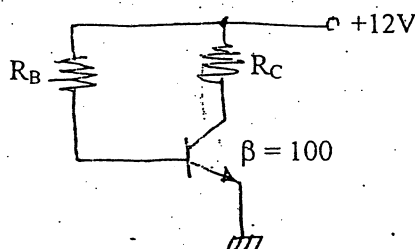


Assume $V_Z = 10V$.

3. a) Draw bridge rectifier circuit and its output waveform with output load resistor (R_L) connected. Express the ripple factor if smoothing capacitor, C is connected to the circuit. [3]
- b) Draw output waveforms of the following circuits and indicate the peak output voltage. Assume diode is ideal. [3]



4. a) Draw basic differential amplifier circuit and indicate its input and output voltage waveforms. [2]
 b) Describe the operation of CMOS NOT-gate circuit. [4]
 c) Find R_B and R_C in the given circuit. Given data are: $I_C = 1.2\text{mA}$, $V_{CE} = 6\text{V}$ and $\beta = 100$. [4]



5. a) State six important properties of ideal opamp. [3]
 b) Derive voltage gain for noninverting amplifier using ideal opamp. [3]
 c) Describe the operation of square wave generator using opamp. [4]
 6. a) Define antenna and electromagnetic wave (EMW) propagation. [4]
 b) Explain and enlist wired and wireless communication systems. [4]
 c) Draw a block diagram of AM super heterodyne radio receiver. [2]
 7. a) Why NOR and NAND gates are called universal gates? Explain with examples. [3]
 b) Draw a block diagram of edge triggered, with preset and clear facilities, D-flip flop and its truth table. State one important advantage over RS flip flop. [3]
 8. a) State and prove De Morgan's Theorems. [3]
 b) Convert the followings: [3]
 i) 33_{10} to binary
 ii) $(1100\ 0011)_2$ to decimal
 iii) Add $(1001)_2$ and $(0111)_2$
 9. a) Draw the block diagram of (CRO) oscilloscope. And explain its working function. [4]
 b) Draw the block diagram of DMM (Digital Multimeter). And explain how it measures DC voltage, DC current and resistance. [6]
 10. Write short notes on: (any two) [2×4]
 a) Graphical analysis of diode circuit
 b) Shift register and counter
 c) E-MOSFET
